



Estd. 1973

# DAY PUBLIC SCHOOL


SECTOR-4, BOKARO STEEL CITY  
50+ Glorious Years!



# SUMMER HOLIDAY HOMEWORK

NAME : \_\_\_\_\_

CLASS & SECTION : III - .....



“ The summer break is a beautiful opportunity to pause, reflect and grow. Use this time to explore your interests, strengthen your skills and spend quality time with your family. Keep learning, stay curious and believe in yourself— because every small effort today builds a brighter tomorrow.” ”

S.K. Mishra  
Principal



DAV PUBLIC SCHOOL, SECTOR – IV, BOKARO STEEL CITY

Summer Holiday Homework

CLASS: III

SUBJECT: ENGLISH

1. Write 10 pages of Handwriting in your H.W copy.
2. Revise and learn Q/Ans of all the chapters taught till date.
3. Make a list of 10 common naming words and write 3 special naming words for each. ( Practice Book pg.no. 7 ) in H.W copy.
4. Draw and colour your favourite pet animal in an A 4 size chart paper

SUBJECT: HINDI

- 1) भाषा अभ्यास पेज 6, प्रश्न 8 चित्रों के आधार पर कहानी लिखिए । (H.W. copy)
- 2) भारत के पाँच त्योहारों का नाम लिखें और सभी त्योहारों के बारे में दो लाइन लिखें । (Scrap book)
- 3) भारत के मानचित्र में उन राज्यों को दर्शाएँ, जिसमें प्रमुख नदियां बहती हैं । (Scrap book)
- 4) विभिन्न राज्यों के भाषाओं को लिखें :-  
क) पंजाब ख) महाराष्ट्र ग) राजस्थान घ) गुजरात ङ) केरल झ) कोलकाता (H.W. copy)
- 5) किसी एक पशु का मुखौटा बनाएं । (भाषा माधुरी पेज 12 )
- 6) भाषा अभ्यास पेज 1 से 7 पूरा करें ।
- 7) भाषामधुरी पाठ 1 और 2 प्रश्न -उत्तर एवं जीवन मूल्य प्रश्न उत्तर याद करें।

SUBJECT: MATHS

Solve the below questions in a Thin test Copy

1. Choose the correct option:

a) The greatest four digit number is \_\_\_.

(i) 9000 (ii) 9999 (iii) 9900

b)  $4000+500+70+8 = \underline{\quad}$

(i) 4507 (ii) 4578 (iii) 8754

c) The place value of 6 in 5678 is \_\_\_\_.

(i) 6000 (ii) 600 (iii) 60

2. Compare using  $>$ ,  $<$  or  $=$

i) 8307 ( ) 8305

ii) 2002 ( ) 2020

3. Write the successor of 2013.

4. Expand it ( any one way) :3546

5. Arrange in ascending order: 2222 ,528,9423,2493

6. Write the number names : i) 6709 (ii) 9087

7. Write the numerals:

i) Four thousand eight hundred five

ii) Two thousand twenty

8. Write TRUE or FALSE:

a)  $99 + 0 = 0$  b)  $500 - 300 = 200$

9. Word problem


(a) A train was carrying 3718 people . At one station 1439 people got down from the train. How many people are left in the train?

Print below in A4 Sheet and solve

Name : \_\_\_\_\_



# Color by Addition



yellow = 1



orange = 2



green = 3



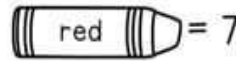
white = 4




pink = 5



purple = 6



red = 7



blue = 8

1+7=

8+0=

6+2=

7+1=

4+4=

1+3=

4+3=

2+5=

2+2=

4+4=

3+5=

2+5=

1+0=

2+2=

3+1=

2+2=

4+0=

5+3=

2+1=

5+2=

1+6=

8+0=

5+3=

3+4=

3+0=

2+6=

7+1=

4+4=

5+3=

1+2=

3+0=

2+4=

1+0=

8+0=

7+1=

3+3=

2+3=

1+5=

4+4=

1+1=

2+0=

6+1=

4+2=

6+0=

1+4=

8+0=

1+1=

4+2=

6+0=




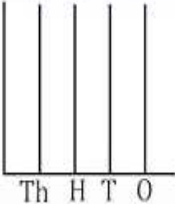
1+4=

2+0=

1+1=

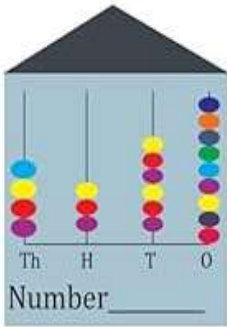
## Number System

**A. Look at the numbers. Draw beads into the abacus and write their number names:**

6834		
2346		
1362		
4012		

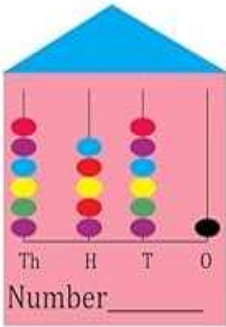
**B. Write the numbers represented on the abacus:**

1.



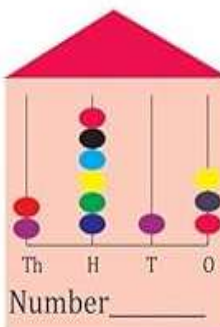
Number \_\_\_\_\_

2.



Number \_\_\_\_\_

3.



Number \_\_\_\_\_

Skill: Reading a four digit number

**SUBJECT: G.SCIENCE**

1. Paste pictures of 5 types of plants :

Herb , Shrub , Creeper, Climber and Tree with their names in a A4 size paper.

2. Prepare clay model of Tongue with different taste areas, place it in a small box and submit with your name at back

**OR**

Prepare A model of Sense Organs

3. Learn all spellings, question answers of Ch-1,2 ,practice Diagrams also.

**SUBJECT: S.ST**

**From Ch-1 and 2**

1. Learn Question & Answer
2. Write Tick the correct option and fill in the blanks, write 20 difficult words
3. Draw a family tree, ,make a card for a family member whom you want to thank .

**All activities to be written in your Practical copy**